




Finding amounts of money - ANSWERS

Year 3 – Lesson 4

Extension






If you would like a challenge, complete the following challenges in your home learning book.

1. Who has earned the most pocket money over the last two weeks?

Jaxon	Florence	Aisha
		
Week 1: £5 and 99p Week 2: £3 and 65p	Week 1: £3 and 35p Week 2: £5 and 90p	Week 1: £6 and 15p Week 2: £2 and 80p

2. Work out the total amount of money in each bag. Which bags are in the wrong order?

smallest total ← → greatest total

A.	B.	C.	D.	E.
				
£4 and 70p + £2 and 99p	£6 and 80p + £1 and 90p	£5 and 15p + £3 and 85p	£1 and 5p + £8 and 55p	£7 and 99p + £1 and 20p

**A, B, C, E, D**