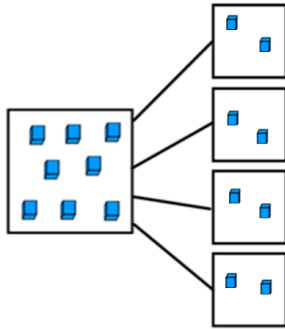


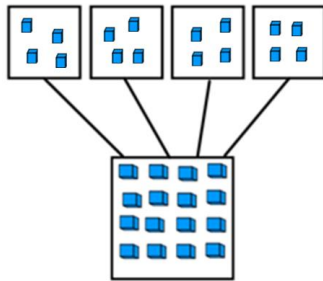
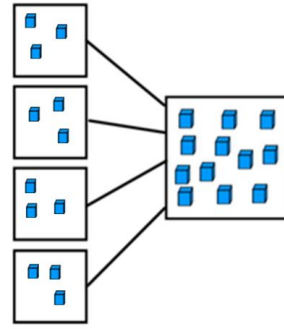
ANSWERS

In your books work out these fractions and write the division calculation to match.



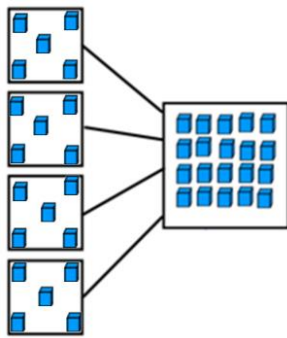
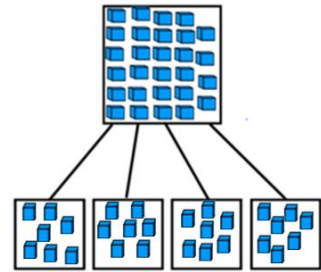
1. $8 \div 4 = 2$

2. $12 \div 4 = 3$



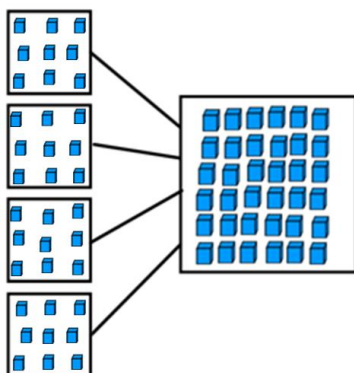
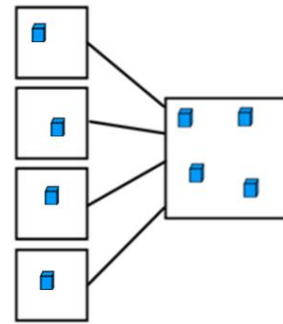
3. $16 \div 4 = 4$

4. $28 \div 4 = 7$



5. $20 \div 4 = 5$

6. $4 \div 4 = 1$



7. $36 \div 4 = 9$

8. $24 \div 4 = 6$

