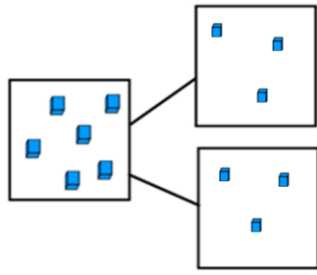


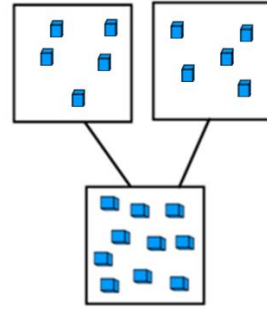
# ANSWERS

In your books work out these fractions and write the division calculation to match.

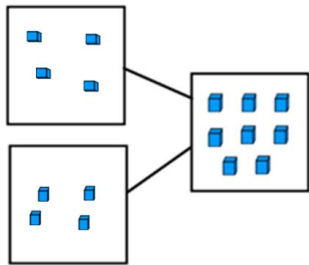
1.  $6 \div 2 = 3$



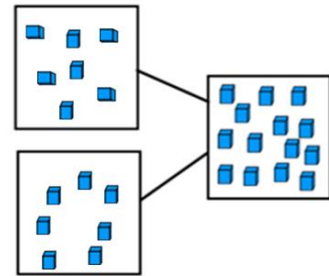
2.  $10 \div 2 = 5$



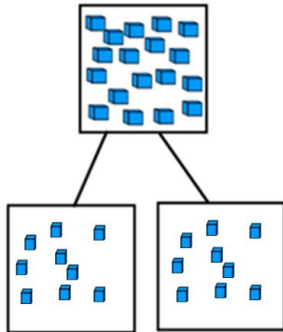
3.  $8 \div 2 = 4$



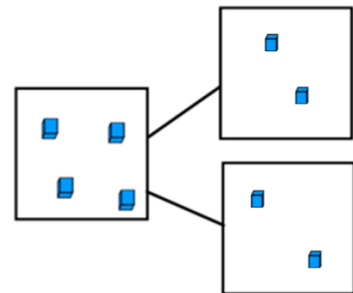
4.  $14 \div 2 = 7$



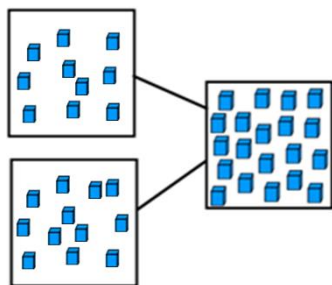
5.  $18 \div 2 = 9$



6.  $4 \div 2 = 2$



7.  $20 \div 2 = 10$



8.  $12 \div 2 = 6$

