

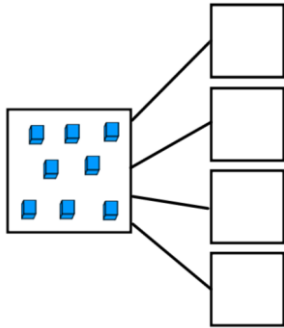
Year 2: Fractions

Friday 12th June 2020

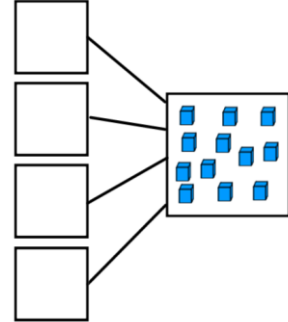
LO: To find a quarter

In your books work out these fractions and write the division calculation to match.

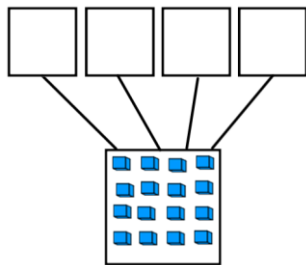
1. $8 \div \underline{\quad} = \underline{\quad}$



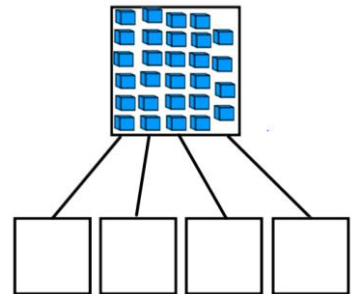
2. $12 \div \underline{\quad} = \underline{\quad}$



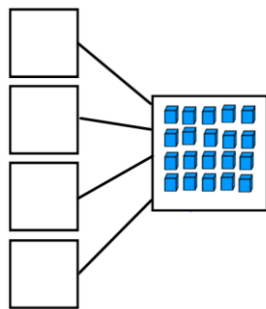
3. $16 \div \underline{\quad} = \underline{\quad}$



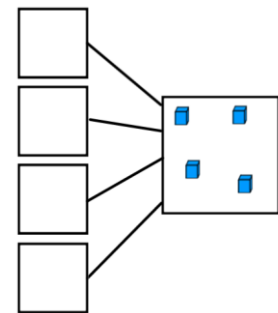
4. $28 \div \underline{\quad} = \underline{\quad}$



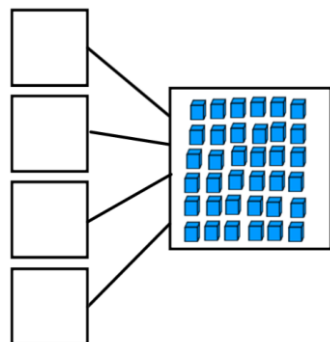
5. $20 \div \underline{\quad} = \underline{\quad}$



6. $4 \div \underline{\quad} = \underline{\quad}$



7. $36 \div \underline{\quad} = \underline{\quad}$



8. $24 \div \underline{\quad} = \underline{\quad}$

