

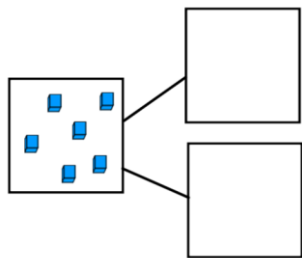
Year 2: Fractions

Thursday 11th June 2020

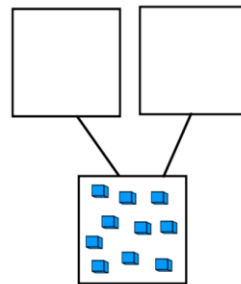
LO: To find a half

In your books find a half of each amount and write the division calculation to match. You can copy the diagram to help you or use objects in your house.

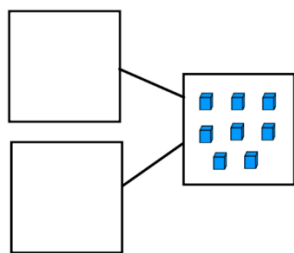
1. $6 \div \underline{\quad} = \underline{\quad}$



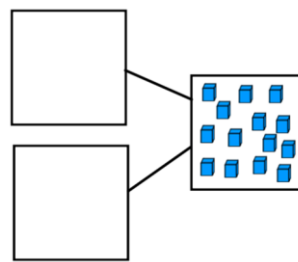
2. $10 \div \underline{\quad} = \underline{\quad}$



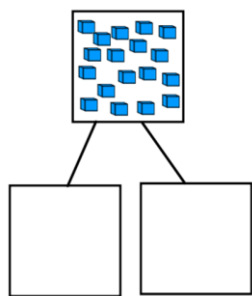
3. $8 \div \underline{\quad} = \underline{\quad}$



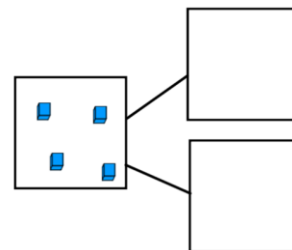
4. $14 \div \underline{\quad} = \underline{\quad}$



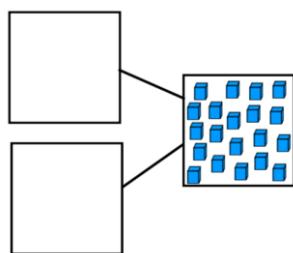
5. $18 \div \underline{\quad} = \underline{\quad}$



6. $4 \div \underline{\quad} = \underline{\quad}$



7. $20 \div \underline{\quad} = \underline{\quad}$



8. $12 \div \underline{\quad} = \underline{\quad}$

