


Maths 5- minute challenges Week 2

Year 2



Day 1: How many can you complete in 5 minutes?

$5 + \underline{\quad} = 20$

$38 + 10 =$

Double 7 is

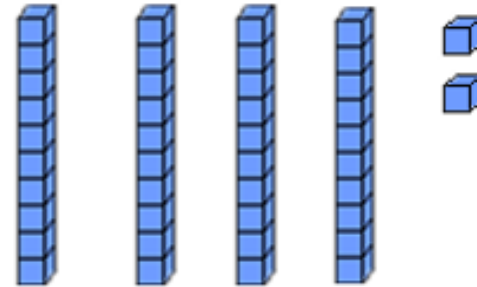
$10 \times 2 =$

Complete this sequence: 89, , , 86, , ,

Half of 16 is

$38 - 7 =$

Write this as a number



Day 1: ANSWERS

$5 + 15 = 20$

$38 + 10 = 48$

Double 7 is 14

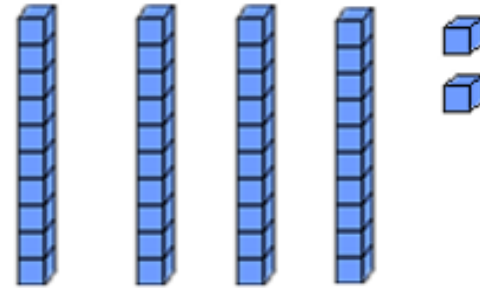
$10 \times 2 = 20$

Complete this sequence: 89, 88, 87, 86, 85, 84, 83

Half of 16 is 8

$38 - 7 = 31$

Write this as a number



42



Day 2: How many can you complete in 5 minutes?

$20 = \underline{\quad} + 17$

$46 + 10 =$

Double 13 is

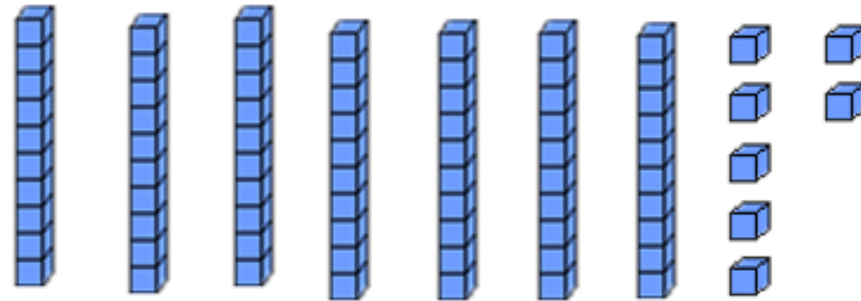
$9 \times 2 =$

Complete this sequence: 22, , , 28, , , 34

Half of 18 is

$30 - 11 =$

Write this as a number



Day 2: ANSWERS

$$20 = 3 + 17$$

$$46 + 10 = 56$$

$$\text{Double } 13 \text{ is } 26$$

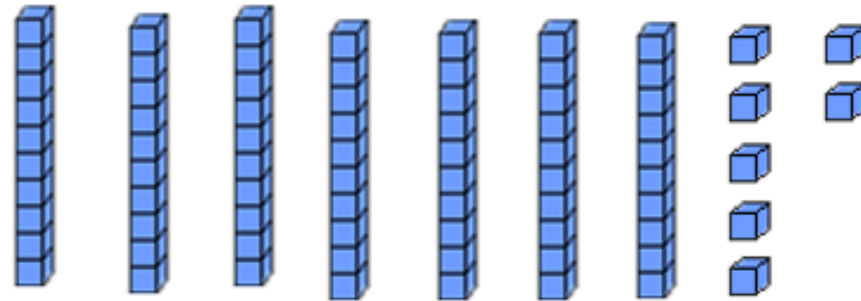
$$9 \times 2 = 18$$

Complete this sequence: 22, 24, 26, 28, 30, 32, 34

Half of 18 is 9

$$30 - 11 = 19$$

Write this as a number



77



Day 3: How many can you complete in 5 minutes?

$20 = \underline{\quad} + 20$

$20 + 67 =$

Double 16 is

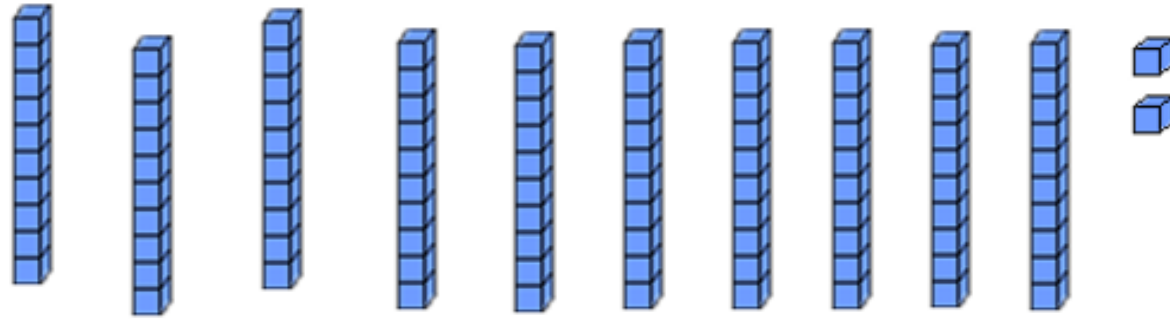
$3 \times 2 =$

Complete this sequence: 15, , 25, , 35, ,

Half of 30 is

$24 - 13 =$

Write this as a number



Day 3: ANSWERS

$$20 = 0 + 20$$

$$20 + 67 = 87$$

$$\text{Double } 16 \text{ is } 32$$

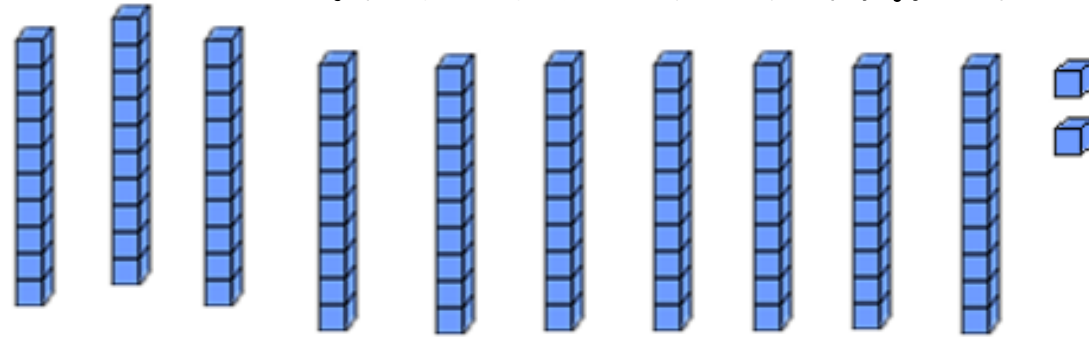
$$3 \times 2 = 6$$

Complete this sequence: 15, 20, 25, 30, 35, 40, 45

Half of 30 is 15

$$24 - 13 = 11$$

Write this as a number



102



Day 4: How many can you complete in 5 minutes?

$13 + \underline{\quad} = 20$

$87 + 10 =$

Double 15 is

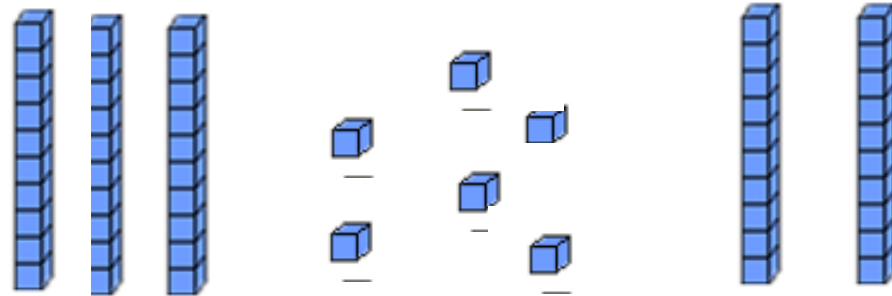
$6 \times 2 =$

Complete this sequence: 92, _____, 88, 86, _____, _____, _____, _____

Half of 22 is _____

$28 - 15 =$

Write this as a number



Day 4: ANSWERS

$13 + 7 = 20$

$87 + 10 = 97$

$\text{Double } 15 \text{ is } 30$

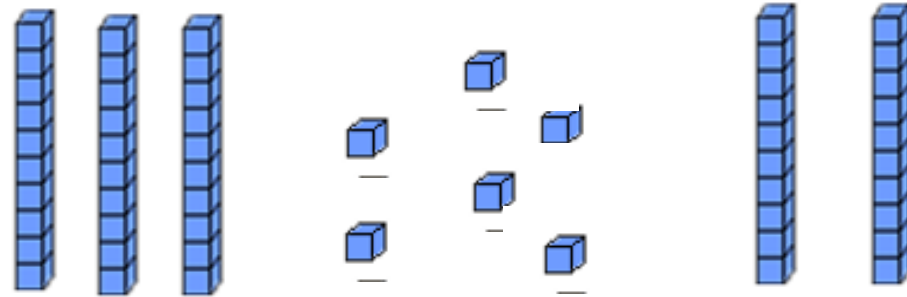
$6 \times 2 = 12$

Complete this sequence: 92, 90, 88, 86, 84, 82, 80, 78

Half of 22 is 11

$28 - 15 = 13$

Write this as a number



56



Day 5: How many can you complete in 5 minutes?

$20 = \underline{\quad} + 16$

$35 + 20 =$

Double 9 is

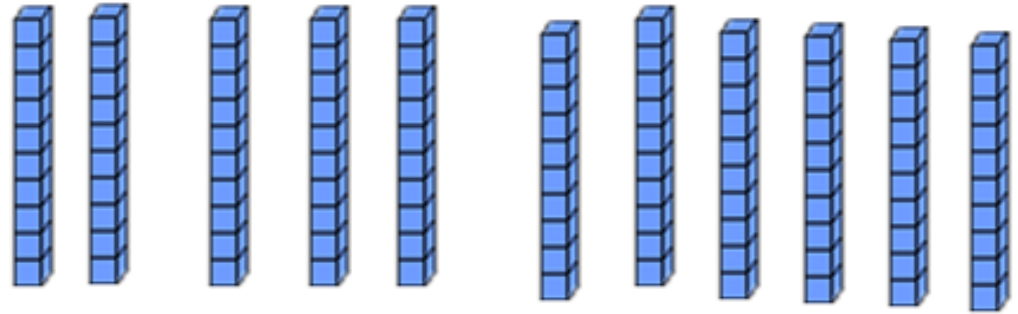
$11 \times 2 =$

Complete this sequence: 100, , , , , 50,

Half of 14 is

$27 - 12 =$

Write this as a number



Day 5: ANSWERS

$20 = 4 + 16$

$35 + 20 = 55$

$\text{Double } 9 \text{ is } 18$

$11 \times 2 = 22$

Complete this sequence: 100, 90, 80, 70, 60, 50, 40

Half of 14 is 7

$27 - 12 = 15$

Write this as a number

110

