


Year 1 Maths- Friday

LO: To complete shape patterns.

1. Draw these shapes in your workbook. Can you continue the pattern they make?



2. Complete these patterns in your workbook and write the name of the shapes that are used.

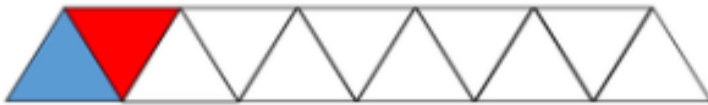


\_\_\_\_\_ and \_\_\_\_\_

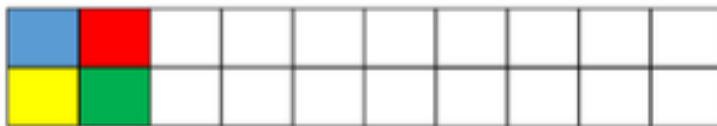


\_\_\_\_\_ and \_\_\_\_\_ and \_\_\_\_\_

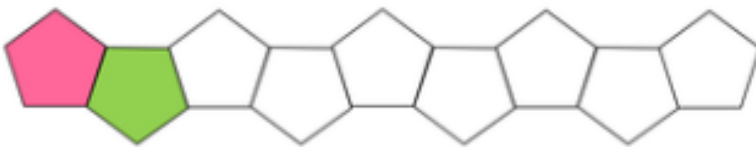
3.




What shape is in this pattern? \_\_\_\_\_



What shape is in this pattern? \_\_\_\_\_



What shape is in this pattern? \_\_\_\_\_



What shape is in this pattern? \_\_\_\_\_

Challenge: Can you use the 3D shapes you found in your home to make a 3D shape pattern?