

Year 2 Maths

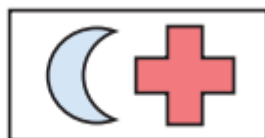
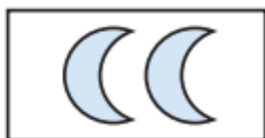
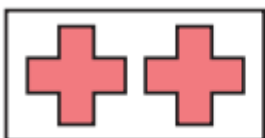
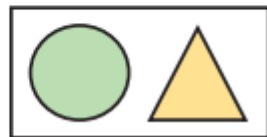
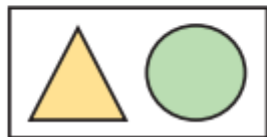
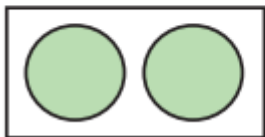
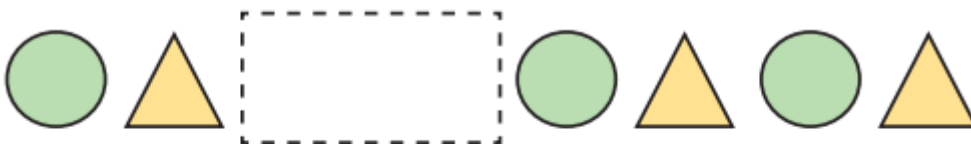
Wednesday 24th June 2020

LO: To make patterns with 2-D shapes.

1. Draw the next two shapes in each pattern.



2. Draw the shapes that should fit in the gap to complete the pattern



3



My pattern goes:
circle, triangle, square,
then it repeats.

a) Draw the first 9 shapes in Rosie's pattern.



b) What is the name of the 10th shape in the pattern?

c) What is the name of the shape to the right of the 5th shape?

4. Draw the 10th shape for each pattern.

a)



1 2 3 4 5 6

10th?

b)



1 2 3 4 5 6 7 8

10th?