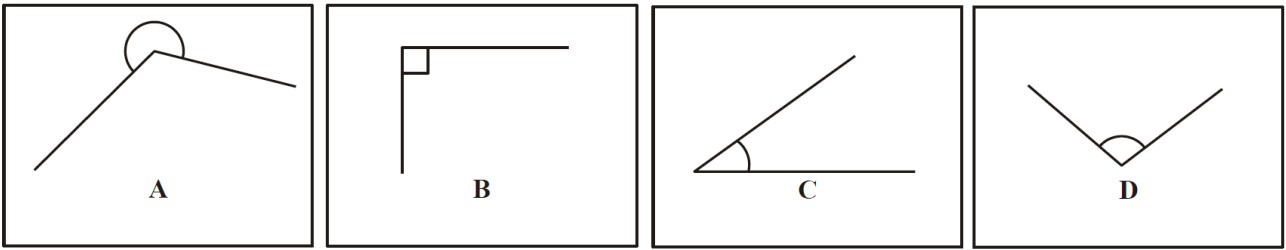
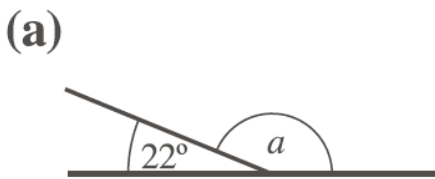


# WEEK 14 Lesson 2 Angles (\*Answers below)

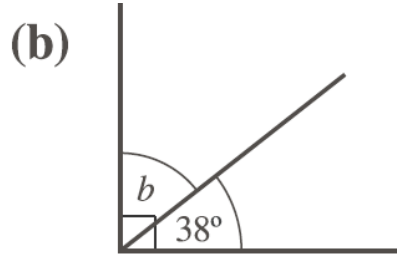
1. Name the angles below:



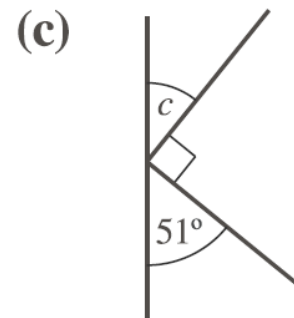
2. Find the missing angles in the questions below.



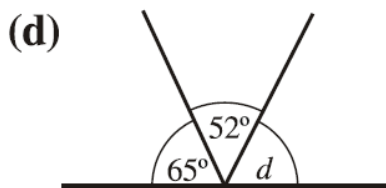
**a =**



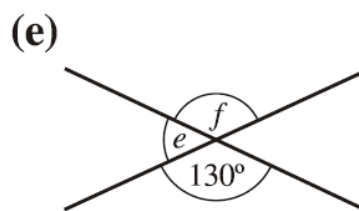
**b =**



**c =**

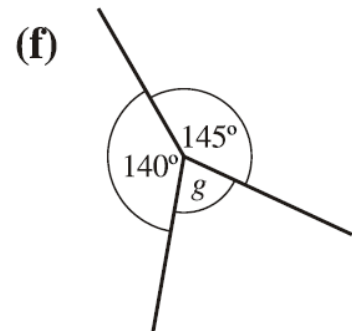


**d =**

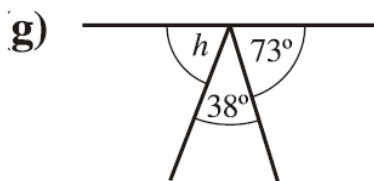


**e =**

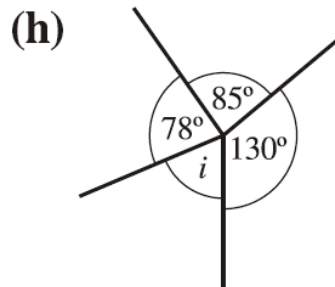
**f =**



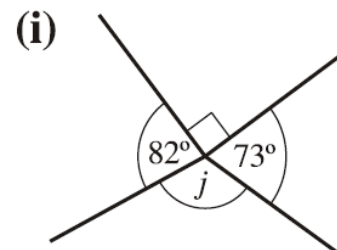
**g =**



**h =**



**i =**



**j =**

**\*REMEMBER: angles on a straight line add up to 180 degrees and angles around a point add up to 360 degrees\***

## Answers

1. A) reflex B) right Angle C) acute D) obtuse
2. (a)  $158^\circ$  (b)  $52^\circ$  (c)  $39^\circ$  (d)  $63^\circ$  (e)  $50^\circ$   
(f)  $130^\circ$  (g)  $75^\circ$  (h)  $69^\circ$  (i)  $67^\circ$  (j)  $115^\circ$