

Y3/4 – Maths – Time

Week 16

Lesson 3

DI

This week we have recapped telling the time using o'clock and half past. If you need a reminder on how to tell the time, you can rewatch Mrs Price's videos:

O'clock: <https://www.loom.com/share/eab003c11d8c4b3ea4fed0d8e1a04b32>

Half past: <https://www.loom.com/share/861fd82f69f9478bb26d63fa6109f1ef>

GP



Have a go at matching the clocks to their matching times:

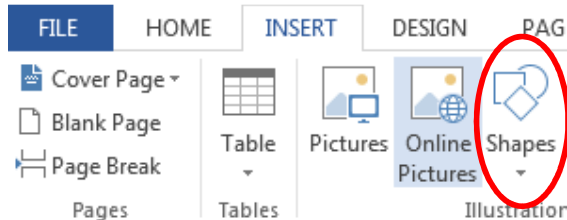
<http://www.scottle.edu.au/ec/viewing/L9643/index.html#>

Make sure you click 'check' once you have matched all the clocks with their times.

IP

Using a print out of this sheet, a pencil and ruler, draw the correct time onto the clock.

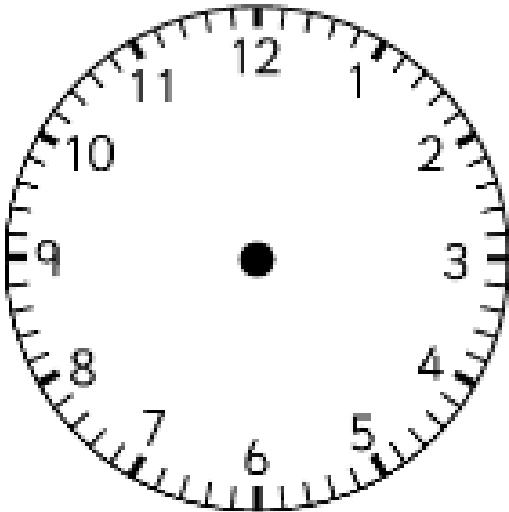
If you can't print out this sheet, you can click on 'Insert' and then 'Shapes' to draw onto the clocks using lines.



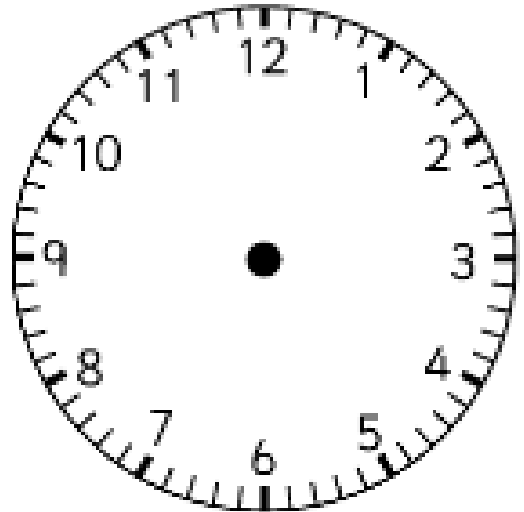
If you need some help to draw the times, you can use an interactive clock: <https://www.visnos.com/demos/clock>

Key points:

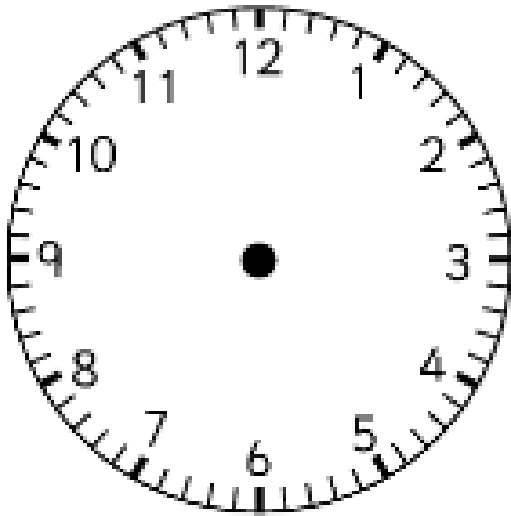
- ★ The minute hand is the long hand
- ★ The hour hand is the short hand
- ★ When the time is 'half past', the hour hand will sit halfway between the hour it is and the next hour



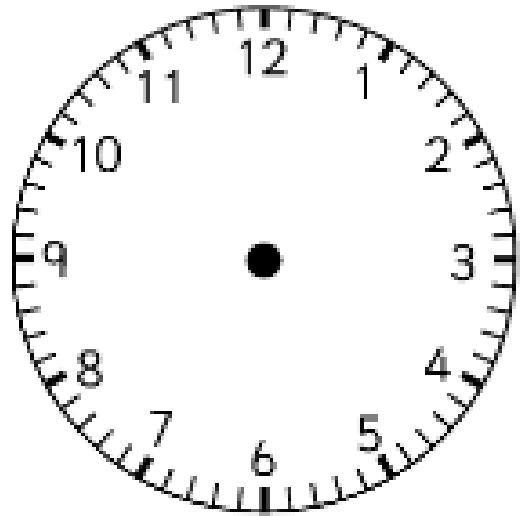
12 o'clock



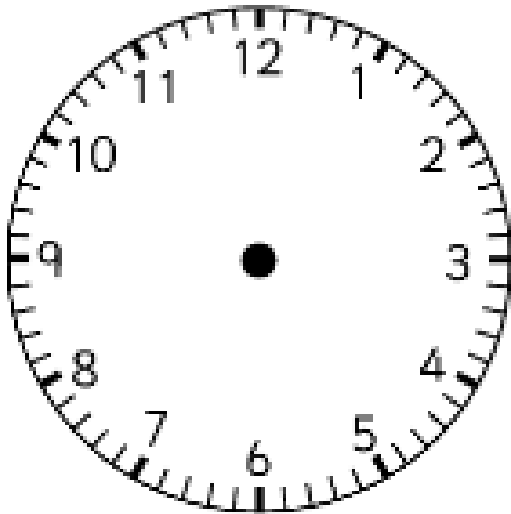
7 o'clock



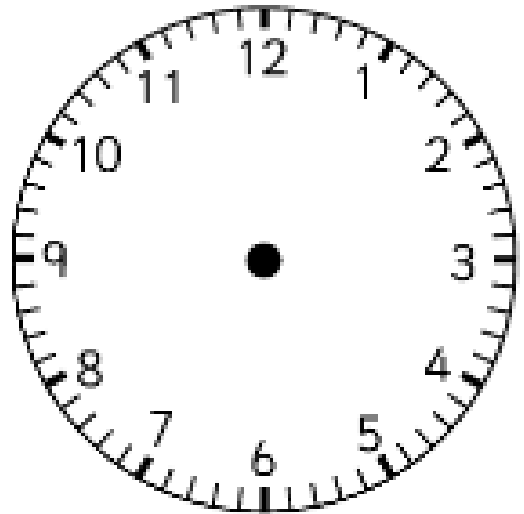
9 o'clock



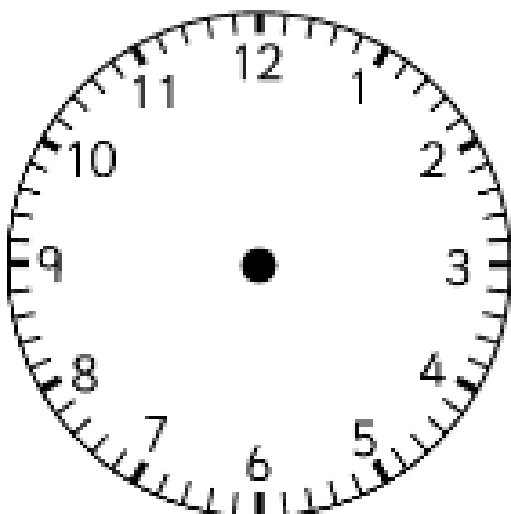
2 o'clock



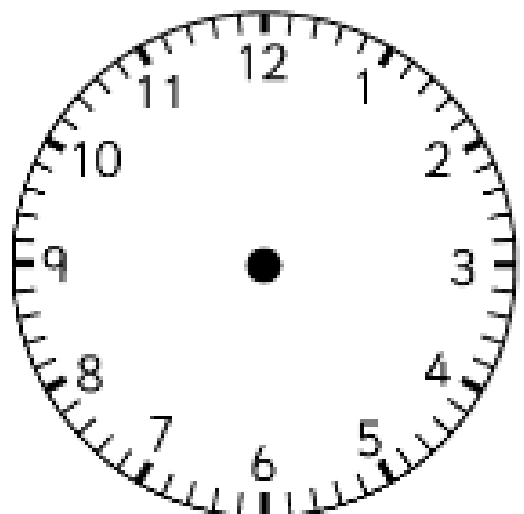
Half past 6



Half past 10



Half past 5



Half past 1

